

IB DIPLOMA Topical Past Papers

# PHYSICS

SL

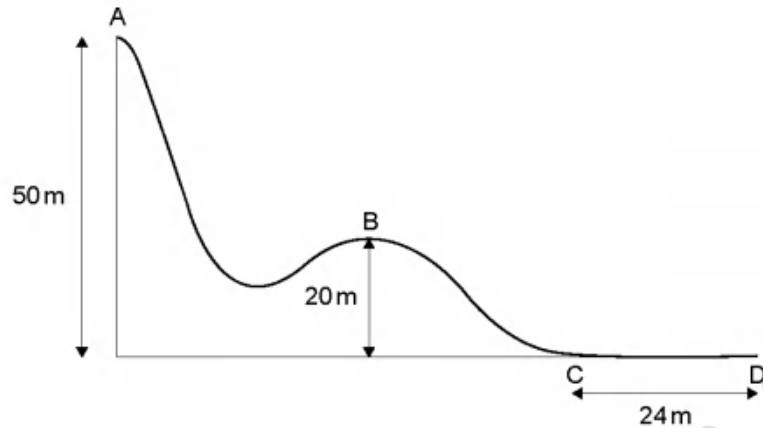
PAPER 2

2017 — 2023

Chapter 1	<b>Measurements &amp; Uncertainties</b>	-----
Chapter 2	<b>Mechanics</b>	Page 1
Chapter 3	<b>Thermal Physics</b>	Page 51
Chapter 4	<b>Oscillations &amp; Waves</b>	Page 84
Chapter 5	<b>Electricity &amp; Magnetism</b>	Page 127
Chapter 6	<b>Circular Motion &amp; Gravitation</b>	Page 172
Chapter 7	<b>Atomic, Nuclear &amp; Particle Physics</b>	Page 190
Chapter 8	<b>Energy Production</b>	Page 225
Chapter 9	<b>Wave Phenomena</b>	-----
Chapter 10	<b>Fields</b>	-----
Chapter 11	<b>Electromagnetic Induction</b>	-----
Chapter 12	<b>Quantum &amp; Nuclear Physics</b>	Page 247
	<b>ANSWERS</b>	Page 248

1 - (PHYSI/21\_SL\_Summer\_2017\_Q1) - Mechanics, Thermal Physics

The diagram below shows part of a downhill ski course which starts at point A, 50 m above level ground. Point B is 20 m above level ground.



(a) A skier of mass 65 kg starts from rest at point A and during the ski course some of the gravitational potential energy transferred to kinetic energy.

(i) From A to B, 24 % of the gravitational potential energy transferred to kinetic energy. Show that the velocity at B is  $12 \text{ ms}^{-1}$ .

[2]

.....

.....

.....

.....

(ii) Some of the gravitational potential energy transferred into internal energy of the skis, slightly increasing their temperature. Distinguish between internal energy and temperature.

[2]

.....

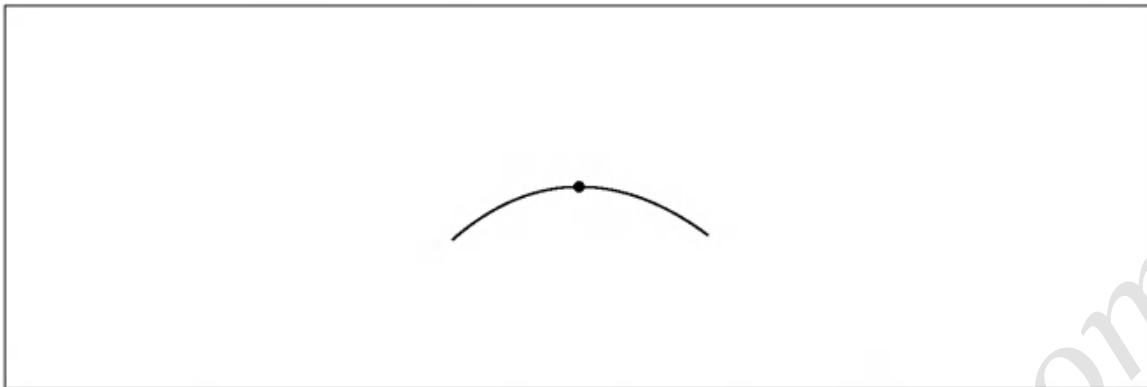
.....

.....

.....

- (b) (i) The dot on the following diagram represents the skier as she passes point B. Draw and label the vertical forces acting on the skier.

[2]



- (ii) The hill at point B has a circular shape with a radius of 20m. Determine whether the skier will lose contact with the ground at point B.

[3]

.....

.....

.....

.....

.....

.....

- (c) The skier reaches point C with a speed of  $8.2 \text{ ms}^{-1}$ . She stops after a distance of 24m at point D.

Determine the coefficient of dynamic friction between the base of the skis and the snow. Assume that the frictional force is constant and that air resistance can be neglected.

[3]

.....

.....

.....

.....

.....

.....

(d) At the side of the course flexible safety nets are used. Another skier of mass 76 kg falls normally into the safety net with speed  $9.6 \text{ ms}^{-1}$ .

- (i) Calculate the impulse required from the net to stop the skier and state an appropriate unit for your answer.

[2]

.....  
.....  
.....  
.....

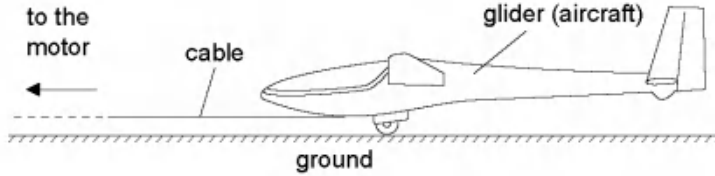
- (ii) Explain, with reference to change in momentum, why a flexible safety net is less likely to harm the skier than a rigid barrier.

[2]

.....  
.....  
.....  
.....

2 - (PHYSI/22\_SL\_Summer\_2017\_Q1) - Mechanics

A glider is an aircraft with no engine. To be launched, a glider is uniformly accelerated from rest by a cable pulled by a motor that exerts a horizontal force on the glider throughout the launch.



- (a) The glider reaches its launch speed of  $27.0 \text{ ms}^{-1}$  after accelerating for  $11.0 \text{ s}$ . Assume that the glider moves horizontally until it leaves the ground. Calculate the total distance travelled by the glider before it leaves the ground. [2]

.....

.....

.....

.....

- (b) The glider and pilot have a total mass of  $492 \text{ kg}$ . During the acceleration the glider is subject to an average resistive force of  $160 \text{ N}$ . Determine the average tension in the cable as the glider accelerates. [3]

.....

.....

.....

.....

.....

- (c) The cable is pulled by an electric motor. The motor has an overall efficiency of 23%. Determine the average power input to the motor.

[3]

.....

.....

.....

.....

.....

.....

.....

.....

- (d) The cable is wound onto a cylinder of diameter 1.2 m. Calculate the angular velocity of the cylinder at the instant when the glider has a speed of  $27 \text{ ms}^{-1}$ . Include an appropriate unit for your answer.

[2]

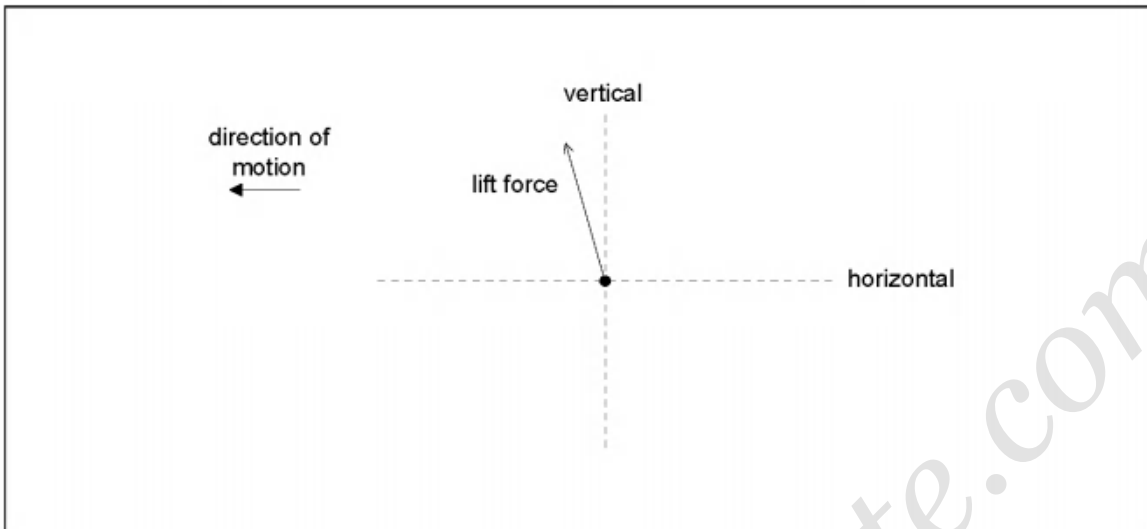
.....

.....

.....

.....

- (e) After takeoff the cable is released and the unpowered glider moves horizontally at constant speed. The wings of the glider provide a lift force. The diagram shows the lift force acting on the glider and the direction of motion of the glider.



Draw the forces acting on the glider to complete the free-body diagram. The dotted lines show the horizontal and vertical directions. [2]

- (f) Explain, using appropriate laws of motion, how the forces acting on the glider maintain it in level flight. [2]

.....

.....

.....

.....

- (g) At a particular instant in the flight the glider is losing 1.00 m of vertical height for every 6.00 m that it goes forward horizontally. At this instant, the horizontal speed of the glider is  $12.5 \text{ m s}^{-1}$ . Calculate the velocity of the glider. Give your answer to an appropriate number of significant figures. [3]

.....

.....

.....

.....

.....

# ANSWERS

[www.examinations.com](http://www.examinations.com)



1 - (PHYSI/21\_SL\_Summer\_2017\_Q1) - Mechanics, Thermal Physics

a	i	$\frac{1}{2}v^2 = 0.24gh$ ✓ $v = 11.9 \text{ «ms}^{-1}\text{»}$ ✓
a	ii	internal energy is the total KE «and PE» of the molecules/particles/atoms in an object ✓ temperature is a measure of the average KE of the molecules/particles/atoms ✓
b	i	arrow vertically downwards from dot labelled weight/W/mg/gravitational force/ $F_g$ / $F_{\text{gravitational}}$ <b>AND</b> arrow vertically upwards from dot labelled reaction force/R/normal contact force/N/ $F_N$ ✓ $W > R$ ✓

b ii

**ALTERNATIVE 1**

recognition that centripetal force is required /  $\frac{mv^2}{r}$  seen ✓

$$= 468 \text{ «N»} \checkmark$$

W/640 N (weight) is larger than the centripetal force required, so the skier does not lose contact with the ground ✓

**ALTERNATIVE 2**

recognition that centripetal acceleration is required /  $\frac{v^2}{r}$  seen ✓

$$a = 7.2 \text{ «ms}^{-2}\text{»} \checkmark$$

$g$  is larger than the centripetal acceleration required, so the skier does not lose contact with the ground ✓

**ALTERNATIVE 3**

recognition that to lose contact with the ground centripetal force  $\geq$  weight ✓

calculation that  $v \geq 14 \text{ «ms}^{-1}\text{»} \checkmark$

comment that  $12 \text{ «ms}^{-1}\text{»}$  is less than  $14 \text{ «ms}^{-1}\text{»}$  so the skier does not lose contact with the ground ✓

**ALTERNATIVE 4**

recognition that centripetal force is required /  $\frac{mv^2}{r}$  seen ✓

calculation that reaction force = 172 «N» ✓

reaction force  $> 0$  so the skier does not lose contact with the ground ✓

c		<p><b>ALTERNATIVE 1</b></p> <p><math>0 = 8.2^2 + 2 \times a \times 24</math> therefore <math>a = \llcorner - \gg 1.40 \llcorner \text{ms}^{-2} \gg</math> ✓</p> <p>friction force = <math>ma = 65 \times 1.4 = 91 \llcorner \text{N} \gg</math> ✓</p> <p>coefficient of friction = <math>\frac{91}{65 \times 9.81} = 0.14</math> ✓</p> <p><b>ALTERNATIVE 2</b></p> <p><math>KE = \frac{1}{2}mv^2 = 0.5 \times 65 \times 8.2^2 = 2185 \llcorner \text{J} \gg</math> ✓</p> <p>friction force = <math>KE/\text{distance} = 2185/24 = 91 \llcorner \text{N} \gg</math> ✓</p> <p>coefficient of friction = <math>\frac{91}{65 \times 9.81} = 0.14</math> ✓</p>
d	i	<p><math>\llcorner 76 \times 9.6 \gg = 730</math> ✓</p> <p>Ns <b>OR</b> <math>\text{kg ms}^{-1}</math> ✓</p>
d	ii	<p>safety net extends stopping time ✓</p> <p><math>F = \frac{\Delta p}{\Delta t}</math> therefore <math>F</math> is smaller <math>\llcorner \text{with safety net} \gg</math></p> <p><b>OR</b></p> <p>force is proportional to rate of change of momentum therefore <math>F</math> is smaller <math>\llcorner \text{with safety net} \gg</math> ✓</p>

## 2 - (PHYSI/22\_SL\_Summer\_2017\_Q1) - Mechanics

a	<p>correct use of kinematic equation/equations ✓</p> <p>148.5 <b>or</b> 149 <b>or</b> 150 <math>\llcorner \text{m} \gg</math> ✓</p>
b	<p><math>a = \frac{27}{11}</math> <b>or</b> 2.45 <math>\llcorner \text{ms}^{-2} \gg</math> ✓</p> <p><math>F - 160 = 492 \times 2.45</math> ✓</p> <p>1370 <math>\llcorner \text{N} \gg</math> ✓</p>

c

**ALTERNATIVE 1**

$$\text{«work done to launch glider»} = 1370 \times 149 \text{ «} = 204 \text{ kJ»} \checkmark$$

$$\text{«work done by motor»} = \frac{204 \times 100}{23} \checkmark$$

$$\text{«power input to motor»} = \frac{204 \times 100}{23} \times \frac{1}{11} = 80 \text{ or } 80.4 \text{ or } 81 \text{ k«W»} \checkmark$$

**ALTERNATIVE 2**

use of average speed  $13.5 \text{ ms}^{-1} \checkmark$

$$\text{«useful power output»} = \text{force} \times \text{average speed} \text{ «} = 1370 \times 13.5 \text{»} \checkmark$$

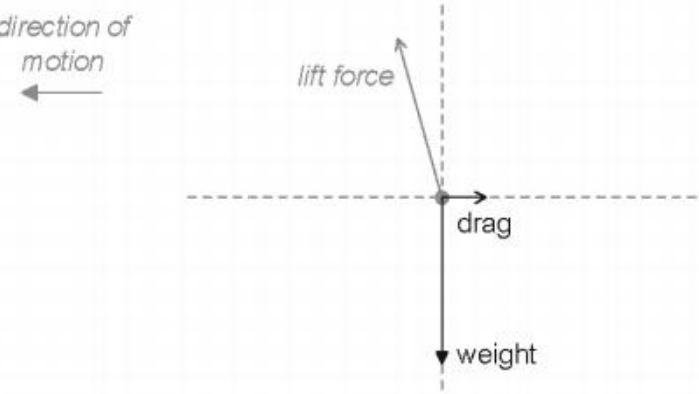
$$\text{power input} = \text{«} 1370 \times 13.5 \times \frac{100}{23} \text{»} = 80 \text{ or } 80.4 \text{ or } 81 \text{ k«W»} \checkmark$$

**ALTERNATIVE 3**

work required from motor = KE + work done against friction  
 $\text{«} = 0.5 \times 492 \times 27^2 + (160 \times 148.5) \text{»} = 204 \text{ «kJ»} \checkmark$

$$\text{«energy input»} = \frac{\text{work required from motor} \times 100}{23} \checkmark$$

$$\text{power input} = \frac{883000}{11} = 80.3 \text{ k«W»} \checkmark$$

d	$\omega = \left\langle \frac{v}{r} \right\rangle = \frac{27}{0.6} = 45 \checkmark$ <p>rad s<sup>-1</sup> ✓</p>
e	<p>direction of motion ←</p>  <p>drag correctly labelled and in correct direction ✓</p> <p>weight correctly labelled and in correct direction <b>AND</b> no other incorrect force shown ✓</p>

f	<p>name Newton's first law ✓</p> <p>vertical/all forces are in equilibrium/balanced/add to zero <b>OR</b> vertical component of lift mentioned ✓</p> <p>as equal to weight ✓</p>
g	<p>any speed and any direction quoted together as the answer ✓</p> <p>quotes their answer(s) to 3 significant figures ✓</p> <p>speed = 12.7 m s<sup>-1</sup> <b>or</b> direction = 9.46° <b>or</b> 0.165 rad «below the horizontal» <b>or</b> gradient of <math>-\frac{1}{6}</math> ✓</p>